

04/24/14 Agenda:

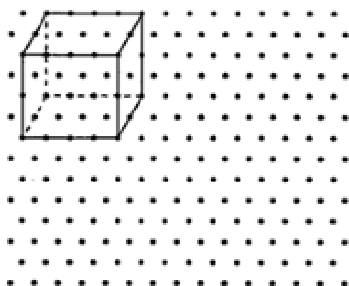
- Review Unit 10 Test
- Hand back Mini Quiz

- Nets - Review from day 1
 - Nets Worksheet

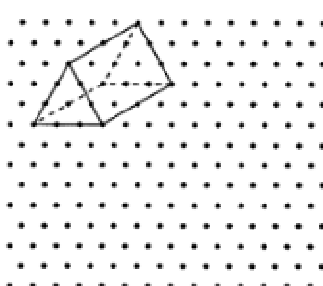
- Start NGA review tomorrow
 - Continue review on Monday 4/28
 - NGA Final Exam on Tuesday 4/29

Use the dots to redraw the 3-dimensional figure.

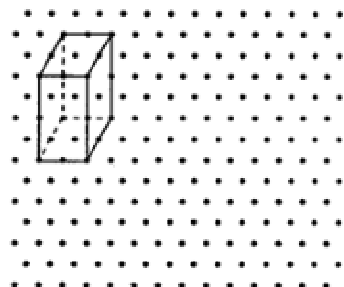
1.



2.

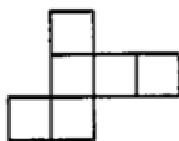


3.

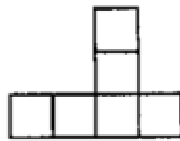


4. Which of the following nets can be folded to form a cube? There can be more than 1 answer.

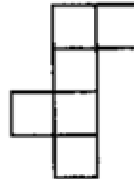
A.



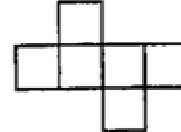
B.



C.



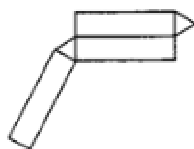
D.



5. Match each of the nets with its 3-dimensional figure



A.



B.



C.



D.

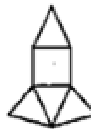


6. Which of the nets will fold to make a pyramid with a square base? There can be more than 1 answer.

A.



B.



C.

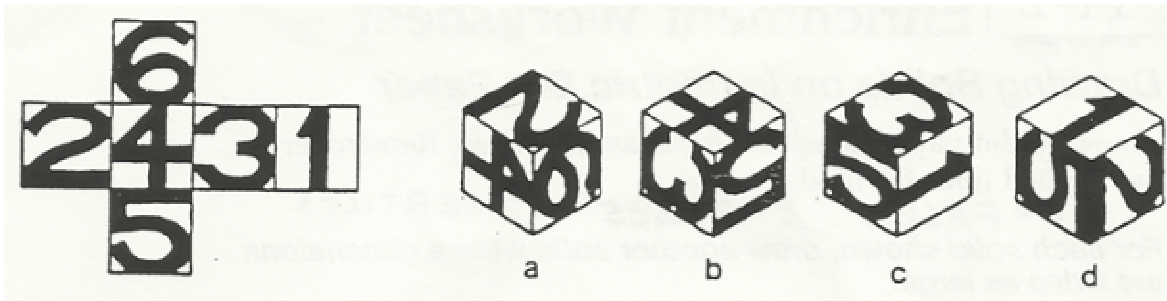


D.

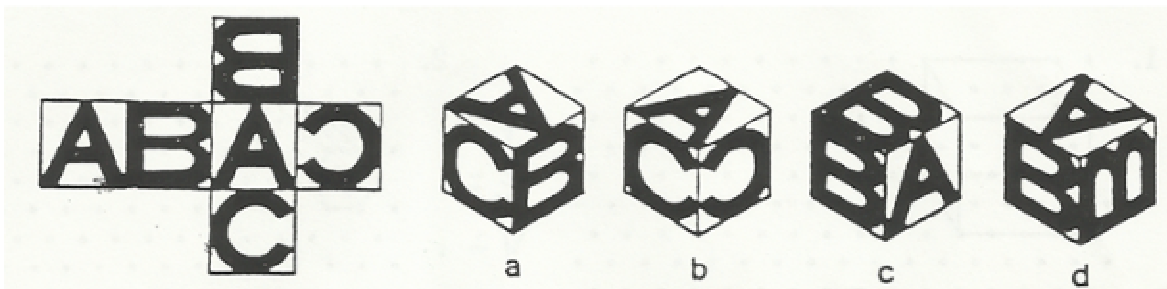


For #7-10, determine which box represents the net when it is folded. There is only one answer for each question.

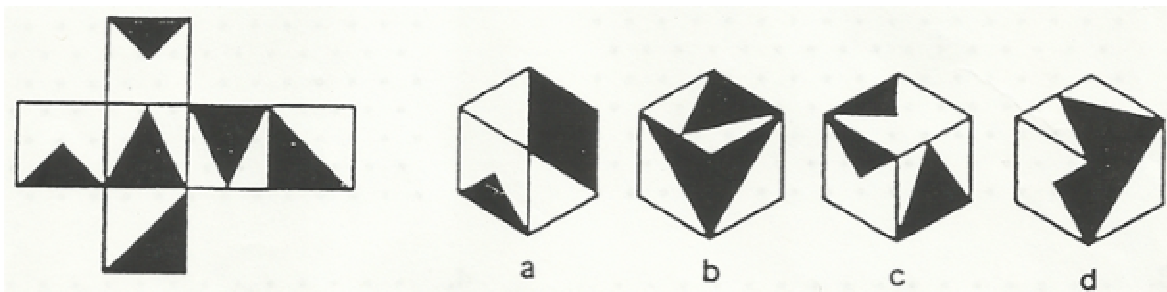
7.



8.



9.



10.

